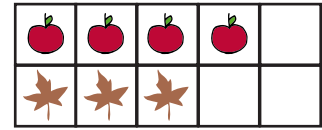


OPTELLEN - GETALLENGBIED TOT 10

Tel de dingen bij elkaar op.
Vul de som en het totaal in.
Een voorbeeld:




$$\underline{4} + \underline{3} = \underline{7}$$

1


3

4

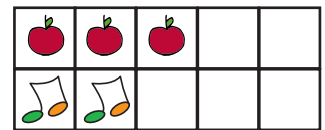
5




$$\underline{4} + \underline{3} = \underline{7}$$




$$\underline{1} + \underline{5} = \underline{6}$$



$$\underline{3} + \underline{2} = \underline{5}$$




$$\underline{6} + \underline{1} = \underline{7}$$



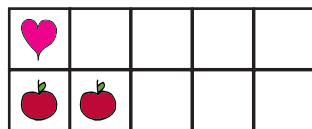
$$\underline{3} + \underline{3} = \underline{6}$$




$$\underline{2} + \underline{5} = \underline{7}$$



$$\underline{3} + \underline{6} = \underline{9}$$




$$\underline{1} + \underline{2} = \underline{3}$$




$$\underline{5} + \underline{5} = \underline{10}$$



$$\underline{8} + \underline{1} = \underline{9}$$



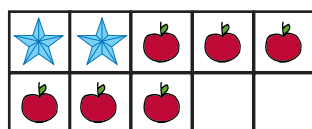
$$\underline{7} + \underline{2} = \underline{9}$$



$$\underline{3} + \underline{4} = \underline{7}$$



$$\underline{1} + \underline{2} = \underline{3}$$



$$\underline{2} + \underline{6} = \underline{8}$$

