


Vergroten van breuken

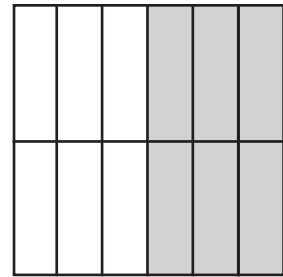
Vergroten: Er ontstaan meer delen, maar kleiner.
De totale grootte blijft hetzelfde.



$$\frac{1}{2}$$



$$\frac{2}{4}$$



$$\frac{6}{12}$$

Vergroot elke breuk met de getallen 2, 5, 7 en 3.

$$\frac{4}{12} = \frac{\quad}{\quad} = \frac{\quad}{\quad} = \frac{\quad}{\quad} = \frac{\quad}{\quad}$$

$$\frac{1}{3} = \frac{\quad}{\quad} = \frac{\quad}{\quad} = \frac{\quad}{\quad} = \frac{\quad}{\quad}$$

$$\frac{25}{6} = \frac{\quad}{\quad} = \frac{\quad}{\quad} = \frac{\quad}{\quad} = \frac{\quad}{\quad}$$

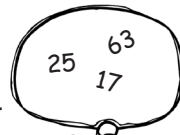

$$\frac{10}{17} = \frac{\quad}{\quad} = \frac{\quad}{\quad} = \frac{\quad}{\quad} = \frac{\quad}{\quad}$$

$$25 \frac{7}{25} = \frac{\quad}{\quad} = \frac{\quad}{\quad} = \frac{\quad}{\quad} = \frac{\quad}{\quad}$$

$$\frac{3}{8} = \frac{\quad}{\quad} = \frac{\quad}{\quad} = \frac{\quad}{\quad} = \frac{\quad}{\quad}$$

$$14 \frac{15}{4} = \frac{\quad}{\quad} = \frac{\quad}{\quad} = \frac{\quad}{\quad} = \frac{\quad}{\quad}$$

$$\frac{7}{12} = \frac{\quad}{\quad} = \frac{\quad}{\quad} = \frac{\quad}{\quad} = \frac{\quad}{\quad}$$



Vul de ontbrekende getallen in.

$$\frac{4}{9} = \frac{\quad}{36}$$

$$\frac{5}{8} = \frac{\quad}{40}$$

$$\frac{7}{31} = \frac{\quad}{93}$$

$$\frac{5}{6} = \frac{\quad}{36}$$

$$\frac{4}{13} = \frac{\quad}{52}$$

$$\frac{3}{21} = \frac{\quad}{63}$$

$$\frac{6}{17} = \frac{\quad}{34}$$

$$\frac{2}{3} = \frac{\quad}{33}$$

$$\frac{9}{9} = \frac{\quad}{90}$$

$$\frac{2}{16} = \frac{\quad}{32}$$

$$\frac{6}{10} = \frac{\quad}{200}$$

$$\frac{8}{9} = \frac{\quad}{72}$$

$$\frac{1}{2} = \frac{\quad}{222}$$

$$\frac{2}{12} = \frac{\quad}{144}$$

