

## Cirkels tekenen van meten

Trek rond de middelpunten cirkels met de aangegeven straal!

a.) 3 cm straal

b.) 1,5 cm straal

° Ma

° Mb

c.) 50 mm diameter

d.) 4 cm diameter

° Mc

° Md

e.) 1 dm diameter

f.) 22 mm straal

° Me

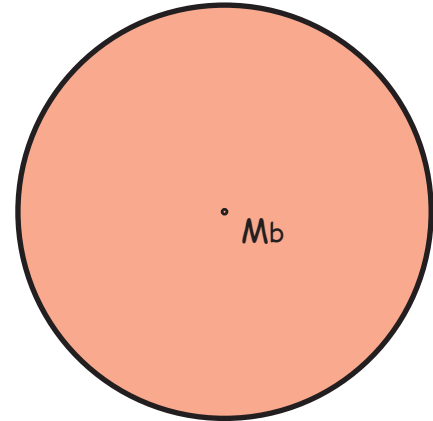
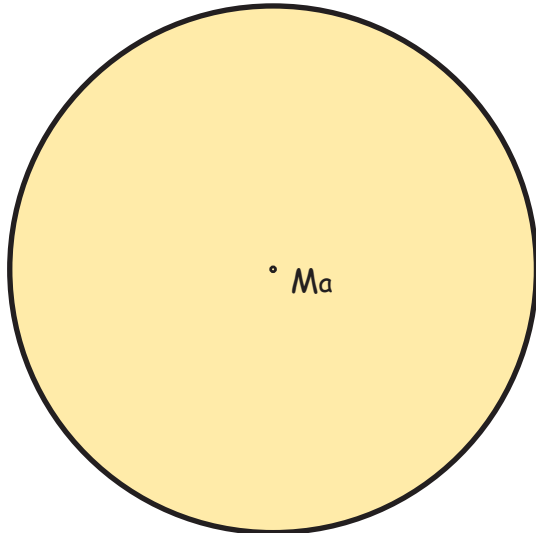
° Mf

## Cirkels tekenen van meten

Bepaal de straal en de diameter van de cirkels!

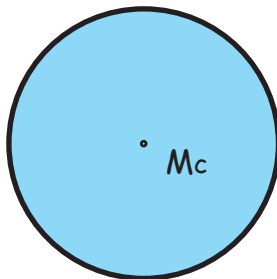
a.) Straal = \_\_\_\_\_

Diameter = \_\_\_\_\_



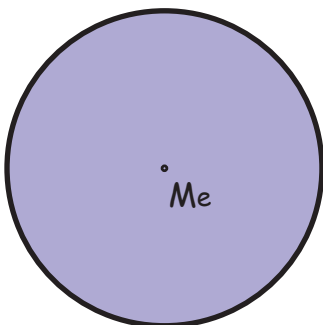
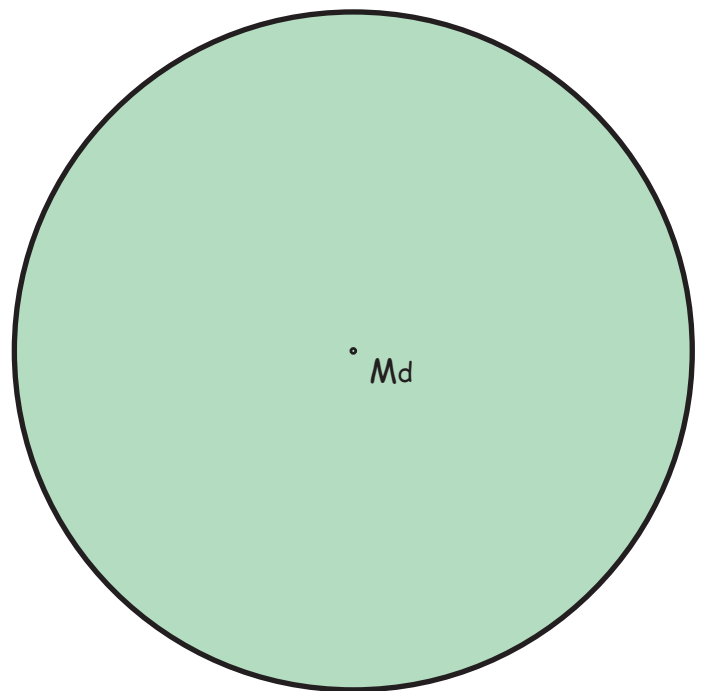
b.) Straal = \_\_\_\_\_

Diameter = \_\_\_\_\_



c.) Straal = \_\_\_\_\_

Diameter = \_\_\_\_\_



e.) Straal = \_\_\_\_\_

Diameter = \_\_\_\_\_

d.) Straal = \_\_\_\_\_

Diameter = \_\_\_\_\_