
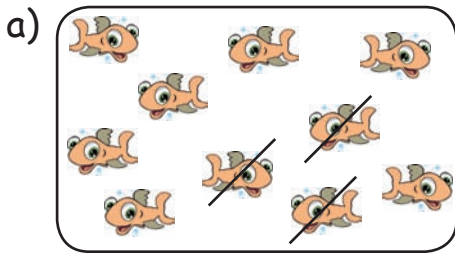


Van 10 naar 0




1.


Voorbeeld:



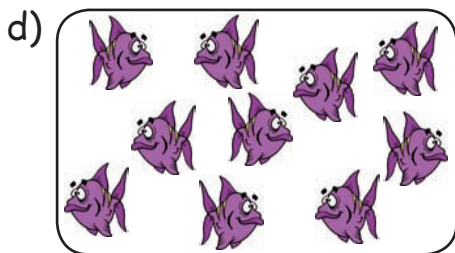
$$10 - 3 = 7$$




$$10 - \square = 5$$



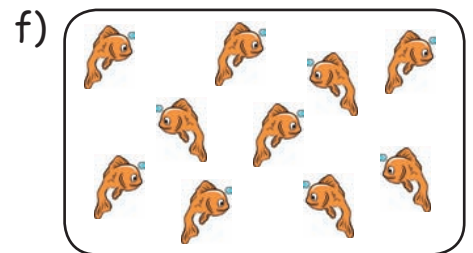
$$10 - \square = 9$$



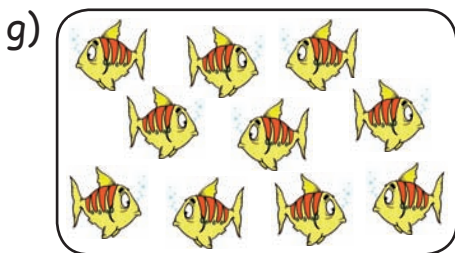
$$10 - \square = 2$$



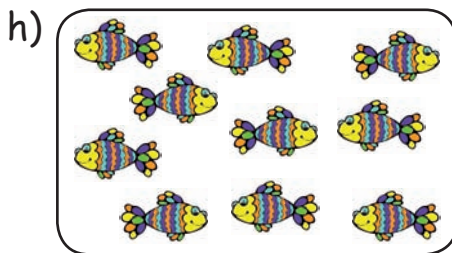
$$10 - \square = 6$$



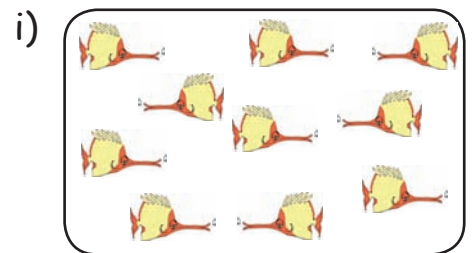
$$10 - \square = 10$$



$$10 - \square = 3$$



$$10 - \square = 1$$



$$10 - \square = 4$$

2. Vul de ontbrekende getallen in de vakjes.

- | | | | |
|----------------------|----------------------|----------------------|----------------------|
| a) $6 = \square - 2$ | e) $7 = 9 - \square$ | i) $\square = 8 - 3$ | m) $5 = \square - 2$ |
| b) $4 = \square - 2$ | f) $5 = 6 - \square$ | j) $\square = 9 - 5$ | n) $2 = \square - 7$ |
| c) $1 = \square - 4$ | g) $6 = 9 - \square$ | k) $\square = 1 - 1$ | o) $1 = \square - 1$ |
| d) $9 = \square - 1$ | h) $3 = 7 - \square$ | l) $\square = 6 - 0$ | p) $3 = \square - 3$ |