





Addieren



1. Zähle zusammen:



	+		=	
--	---	--	---	--







				
□	+	□	=	□

				
□	+	□	=	□

				
□	+	□	=	□

				
□	+	□	=	□

				
□	+	□	=	□

				
□	+	□	=	□

2. Zeichne die Mengen mit eigenen Motiven:

□	+	□	=	□

□	+	□	=	□

□	+	□	=	□