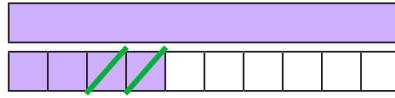


## Aftrekken in het getalengebied 20

Schrijf de sommen op:



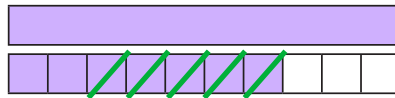
$$12 - 1 = \underline{\quad}$$



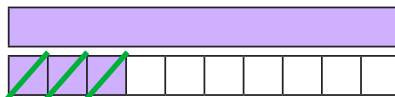
$$\underline{\quad} - \underline{\quad} = \underline{\quad}$$



$$\underline{\quad} - \underline{\quad} = \underline{\quad}$$

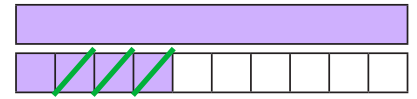


$$\underline{\quad} - \underline{\quad} = \underline{\quad}$$

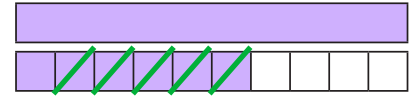


$$\underline{\quad} - \underline{\quad} = \underline{\quad}$$

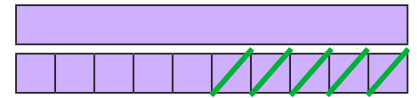
- 1
- 2
- 3
- 4
- 5
- 6
- 7
- 8
- 9
- 10
- 11
- 12
- 13
- 14
- 15
- 16
- 17
- 18
- 19
- 20



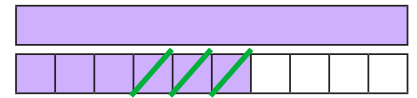
$$14 - \underline{\quad} = \underline{\quad}$$



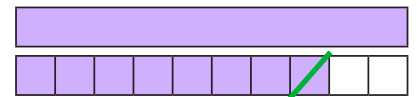
$$\underline{\quad} - \underline{\quad} = \underline{\quad}$$




$$\underline{\quad} - \underline{\quad} = \underline{\quad}$$




$$\underline{\quad} - \underline{\quad} = \underline{\quad}$$



$$\underline{\quad} - \underline{\quad} = \underline{\quad}$$



Bereken:



$$15 - 5 = \underline{\quad}$$

$$15 - 4 = \underline{\quad}$$

$$15 - 3 = \underline{\quad}$$

$$15 - 2 = \underline{\quad}$$

$$14 - 1 = \underline{\quad}$$

$$14 - 3 = \underline{\quad}$$

$$14 - 4 = \underline{\quad}$$

$$14 - 0 = \underline{\quad}$$

$$18 - 2 = \underline{\quad}$$

$$18 - 3 = \underline{\quad}$$

$$18 - 6 = \underline{\quad}$$

$$18 - 7 = \underline{\quad}$$

$$20 - 0 = \underline{\quad}$$

$$20 - 2 = \underline{\quad}$$

$$20 - 4 = \underline{\quad}$$

$$20 - 6 = \underline{\quad}$$