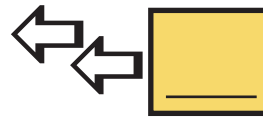
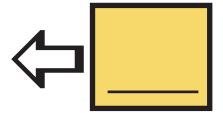

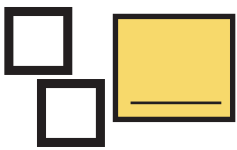


Die Zahlen 1, 2 und 3

Schreibe die Anzahl der Gegenstände in die Kästchen.



Vervollständige die Zeilen:

1 1

2 2

3 3