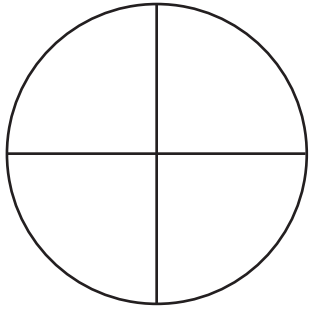
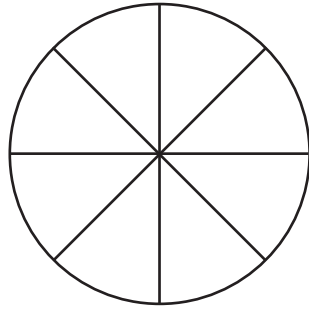


Eerste berekeningen met breuken

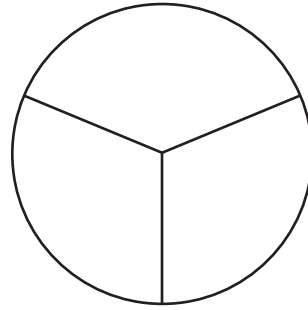
Kleur het aangegeven breukdeel in!



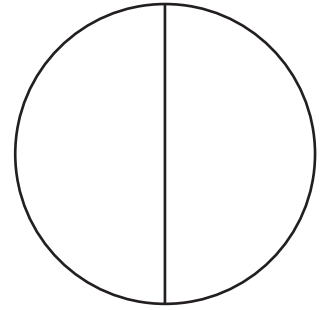
$3/4$



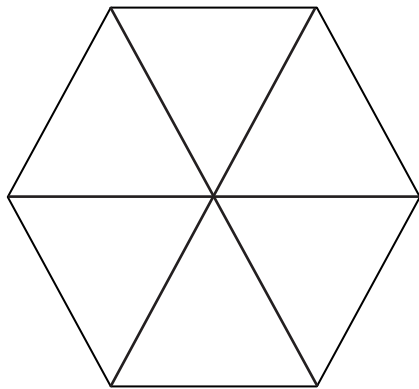
$6/8$



$2/3$



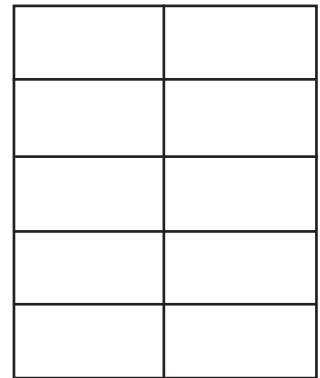
$1/2$



$1/6$



$4/5$



$2/10$

Kleur zo in dat de berekening correct is!

$=$
 $4/2 = 2 \text{ hele}$

$=$
 $8/2 = 4 \text{ hele}$

$=$
 $3/3 = 1 \text{ hele}$