
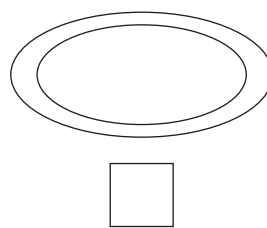





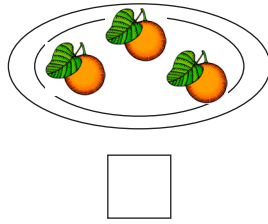
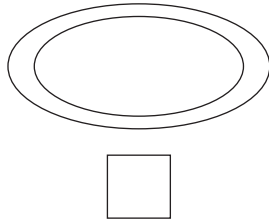
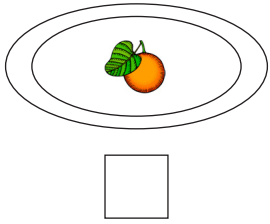
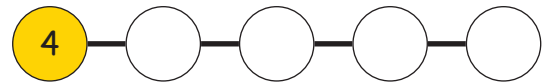
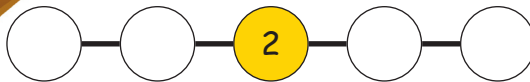
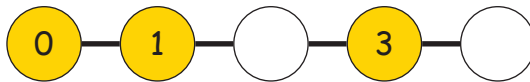
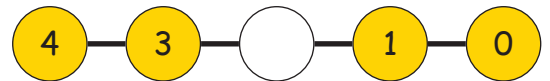
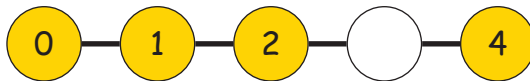


## Kennis maken met het cijfer 0

1. Schrijf op, hoeveel stuks je ziet:



2. Vul de ontbrekende cijfers in:



3. Het cijfer 4 ontleden:

1 + 3 = 4

4 = 3 +

2 +  = 4

4 =  + 2

+ 1 = 4

4 = 0 +

4 +  = 4

4 = 1 +

0 +  = 4

4 = 4 +