




Oefeningen tot 7

Oefeningen tot 7








Oefeningen tot 7

Voltooi de rijen:

Schrijf het aantal in de vakjes:



						
<input style="width: 60px; height: 30px;" type="text"/>	<input style="width: 60px; height: 30px;" type="text"/>	<input style="width: 60px; height: 30px;" type="text"/>	<input style="width: 60px; height: 30px;" type="text"/>	<input style="width: 60px; height: 30px;" type="text"/>	<input style="width: 60px; height: 30px;" type="text"/>	<input style="width: 60px; height: 30px;" type="text"/>

Bereken:

$6 + 1 = \underline{\quad}$

$5 + 2 = \underline{\quad}$

$3 + 4 = \underline{\quad}$

$0 + 7 = \underline{\quad}$

$1 + 6 = \underline{\quad}$

$2 + 5 = \underline{\quad}$

$4 + 3 = \underline{\quad}$

$7 + 0 = \underline{\quad}$



$7 - 0 = \underline{\quad}$

$7 - 1 = \underline{\quad}$

$7 - 2 = \underline{\quad}$

$7 - 3 = \underline{\quad}$

$7 - 4 = \underline{\quad}$

$7 - 5 = \underline{\quad}$

$7 - 6 = \underline{\quad}$

$7 - 7 = \underline{\quad}$