













Defteningen tot 8

Maak de rijen af:

Vul aan tot 8: kleur de vakjes en vul de lege plaatsen in:

 $7 + \underline{\quad} = 8$	 $6 + \underline{\quad} = 8$	 $5 + \underline{\quad} = 8$
 $4 + \underline{\quad} = 8$	 $3 + \underline{\quad} = 8$	 $2 + \underline{\quad} = 8$
 $1 + \underline{\quad} = 8$	 $0 + \underline{\quad} = 8$	 $8 + \underline{\quad} = 8$



Bereken:

- | | |
|-----------------------------|-----------------------------|
| $7 + 1 = \underline{\quad}$ | $8 - 1 = \underline{\quad}$ |
| $6 + 2 = \underline{\quad}$ | $8 - 2 = \underline{\quad}$ |
| $5 + 3 = \underline{\quad}$ | $8 - 3 = \underline{\quad}$ |
| $4 + 4 = \underline{\quad}$ | $8 - 4 = \underline{\quad}$ |
| $3 + 5 = \underline{\quad}$ | $8 - 5 = \underline{\quad}$ |
| $2 + 6 = \underline{\quad}$ | $8 - 6 = \underline{\quad}$ |
| $1 + 7 = \underline{\quad}$ | $8 - 7 = \underline{\quad}$ |
| $0 + 8 = \underline{\quad}$ | $8 - 8 = \underline{\quad}$ |