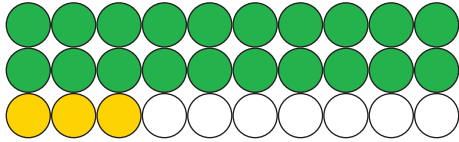


## Aanvullen tot 30

### 1. Hoeveel ontbreken er tot 30?

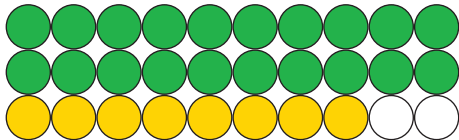
Tel de bolletjes en vul aan tot 30 zoals in het voorbeeld.



driëntwintig

T	E
2	3

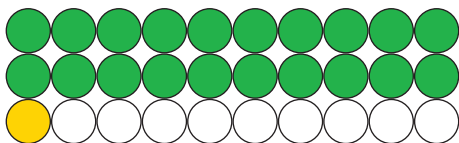
23	+	7	=	30
----	---	---	---	----



achtentwintig

T	E
2	8

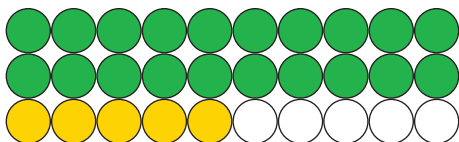
28	+	2	=	30
----	---	---	---	----



eenentwintig

T	E
2	1

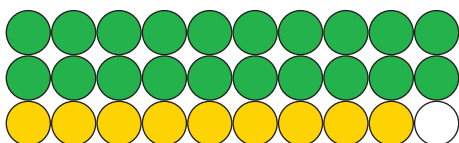
21	+	9	=	30
----	---	---	---	----



vijfentwintig

T	E
2	5

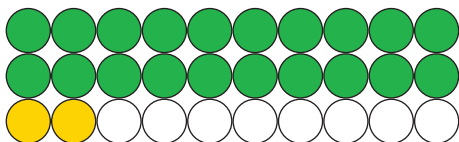
25	+	5	=	30
----	---	---	---	----



negenentwintig

T	E
2	9

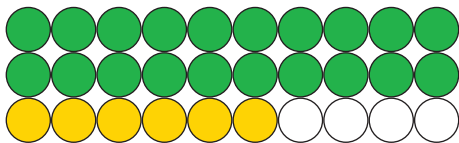
29	+	1	=	30
----	---	---	---	----



tweëntwintig

T	E
2	2

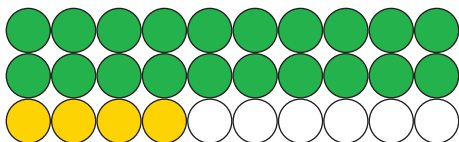
22	+	8	=	30
----	---	---	---	----



zesentwintig

T	E
2	6

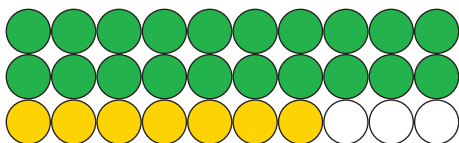
26	+	4	=	30
----	---	---	---	----



vierentwintig

T	E
2	4

24	+	6	=	30
----	---	---	---	----



zevenentwintig

T	E
2	7

27	+	3	=	30
----	---	---	---	----

### 2. Vul de ontbrekende getallen in:

