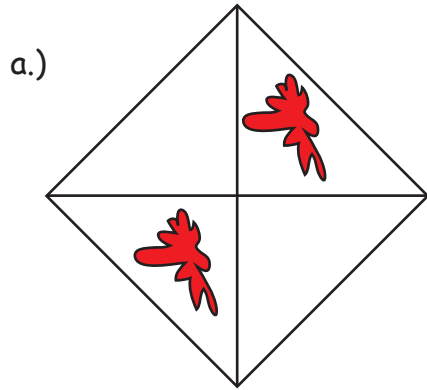
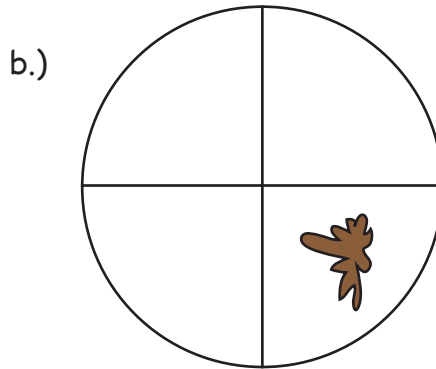


## Anteile erkennen und färben

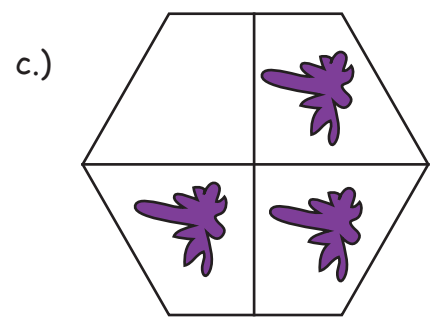
Welcher Teil ist eingefärbt? Schreibe die Lösung auf die Zeile!




$$\frac{2}{4} = \frac{1}{2}$$



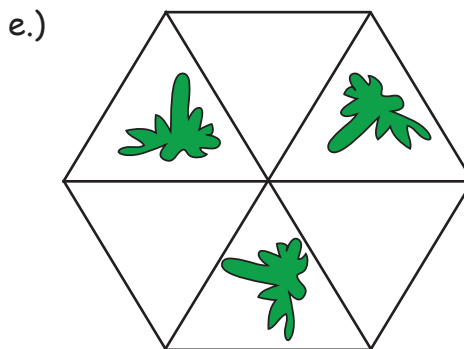
$$\frac{1}{4}$$



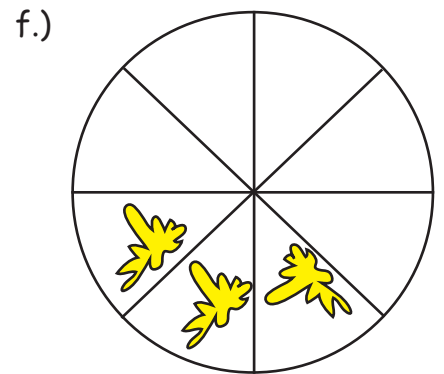
$$\frac{3}{4}$$



$$\frac{1}{2}$$



$$\frac{3}{6} = \frac{1}{2}$$



$$\frac{3}{8}$$

Färbe jeweils  $\frac{1}{3}$  der Figur rot!

