





De klok


Lees de tijd af en schrijf deze in het vakje (zie voorbeeld):




Het is 3 uur.




Het is kwart voor 12.




Het is 6 uur.




Het is kwart over 3.




Het is half 10.




Het is half 8.




Het is half 3.



Het is 10 over 10.



Het is kwart voor 11.



Het is kwart over 4.