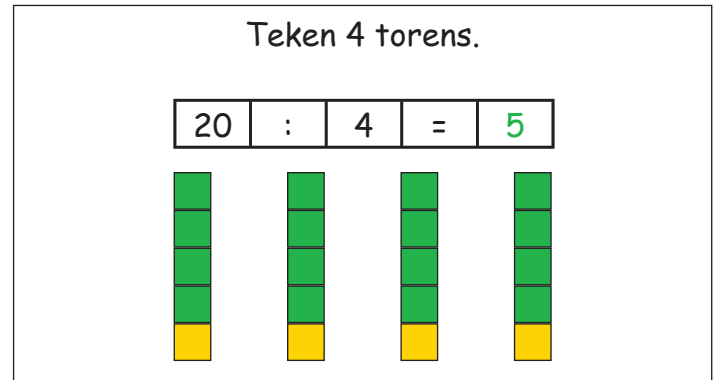
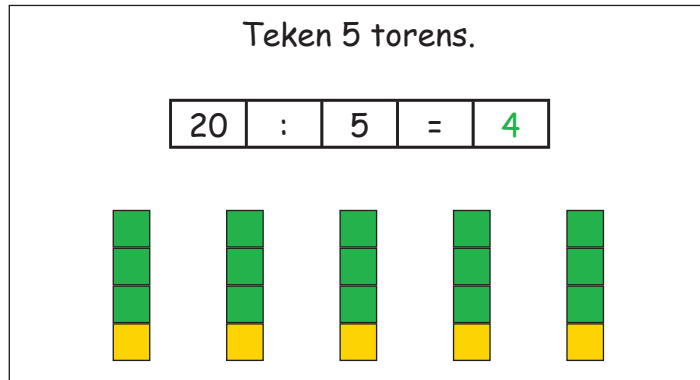
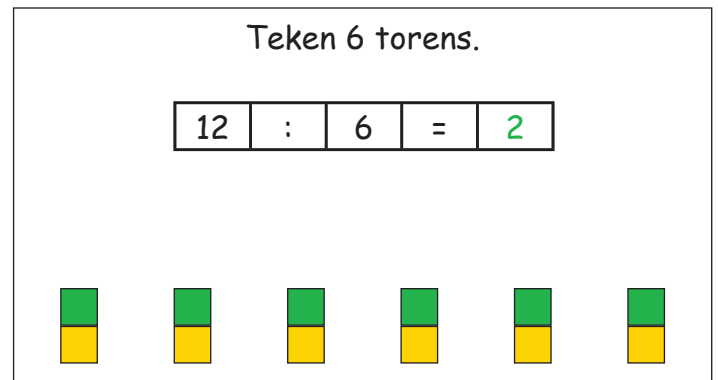
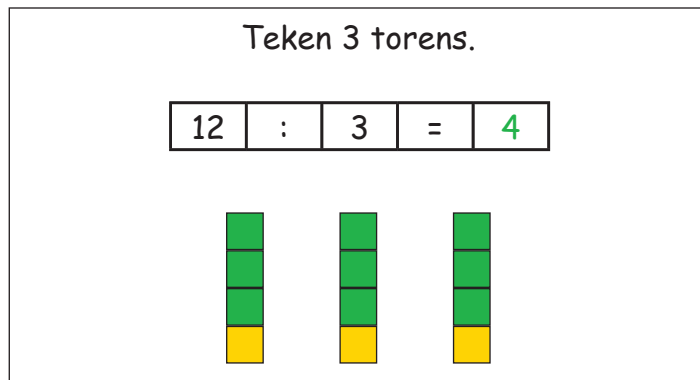


Delen in het getalengebied 20**1. Teken even hoge torens:**

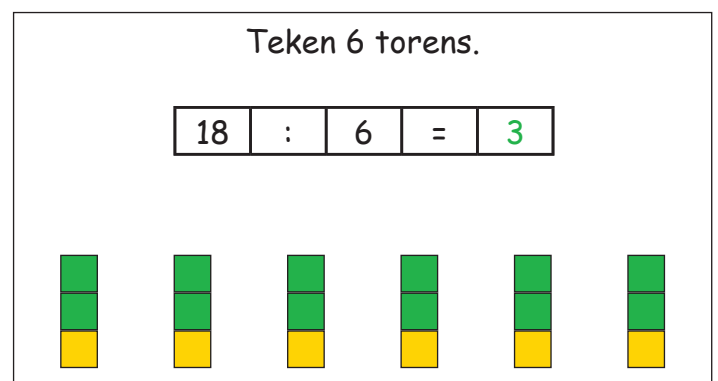
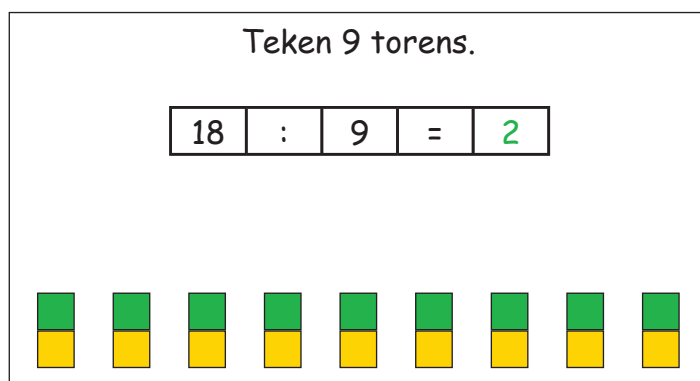
Je hebt 20 bouwstenen ter beschikking.



Je hebt 12 bouwstenen ter beschikking.



Je hebt 18 bouwstenen ter beschikking.

**2. Los de volgende sommen op:**

15 : 3 = 5

14 : 7 = 2

6 : 3 = 2

16 : 8 = 2

20 : 5 = 4

9 : 0 = 0

5 : 1 = 5

18 : 6 = 3

8 : 2 = 4

16 : 4 = 4

10 : 5 = 2

20 : 2 = 10

12 : 6 = 2

18 : 9 = 2

4 : 2 = 2

8 : 4 = 2