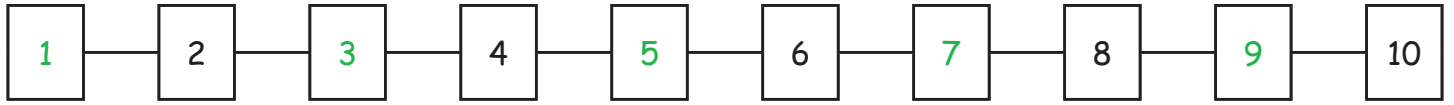


Erbij tellen1. Vul de ontbrekende cijfers in:2. Los de volgende sommen op:

$$\begin{array}{|c|} \hline 2 \\ \hline \end{array} + \begin{array}{|c|} \hline 5 \\ \hline \end{array} = \begin{array}{|c|} \hline 7 \\ \hline \end{array}$$

$$\begin{array}{|c|} \hline 7 \\ \hline \end{array} + \begin{array}{|c|} \hline 1 \\ \hline \end{array} = \begin{array}{|c|} \hline 8 \\ \hline \end{array}$$

$$\begin{array}{|c|} \hline 3 \\ \hline \end{array} + \begin{array}{|c|} \hline 6 \\ \hline \end{array} = \begin{array}{|c|} \hline 9 \\ \hline \end{array}$$

$$\begin{array}{|c|} \hline 9 \\ \hline \end{array} + \begin{array}{|c|} \hline 0 \\ \hline \end{array} = \begin{array}{|c|} \hline 9 \\ \hline \end{array}$$

$$\begin{array}{|c|} \hline 4 \\ \hline \end{array} + \begin{array}{|c|} \hline 6 \\ \hline \end{array} = \begin{array}{|c|} \hline 10 \\ \hline \end{array}$$

$$\begin{array}{|c|} \hline 3 \\ \hline \end{array} + \begin{array}{|c|} \hline 4 \\ \hline \end{array} = \begin{array}{|c|} \hline 7 \\ \hline \end{array}$$

$$\begin{array}{|c|} \hline 7 \\ \hline \end{array} + \begin{array}{|c|} \hline 2 \\ \hline \end{array} = \begin{array}{|c|} \hline 9 \\ \hline \end{array}$$

$$\begin{array}{|c|} \hline 2 \\ \hline \end{array} + \begin{array}{|c|} \hline 3 \\ \hline \end{array} = \begin{array}{|c|} \hline 5 \\ \hline \end{array}$$

$$\begin{array}{|c|} \hline 3 \\ \hline \end{array} + \begin{array}{|c|} \hline 1 \\ \hline \end{array} = \begin{array}{|c|} \hline 4 \\ \hline \end{array}$$

$$\begin{array}{|c|} \hline 1 \\ \hline \end{array} + \begin{array}{|c|} \hline 2 \\ \hline \end{array} = \begin{array}{|c|} \hline 3 \\ \hline \end{array}$$

$$\begin{array}{|c|} \hline 5 \\ \hline \end{array} + \begin{array}{|c|} \hline 5 \\ \hline \end{array} = \begin{array}{|c|} \hline 10 \\ \hline \end{array}$$

$$\begin{array}{|c|} \hline 4 \\ \hline \end{array} + \begin{array}{|c|} \hline 4 \\ \hline \end{array} = \begin{array}{|c|} \hline 8 \\ \hline \end{array}$$

$$\begin{array}{|c|} \hline 5 \\ \hline \end{array} + \begin{array}{|c|} \hline 3 \\ \hline \end{array} = \begin{array}{|c|} \hline 8 \\ \hline \end{array}$$

$$\begin{array}{|c|} \hline 4 \\ \hline \end{array} + \begin{array}{|c|} \hline 2 \\ \hline \end{array} = \begin{array}{|c|} \hline 6 \\ \hline \end{array}$$

$$\begin{array}{|c|} \hline 4 \\ \hline \end{array} + \begin{array}{|c|} \hline 1 \\ \hline \end{array} = \begin{array}{|c|} \hline 5 \\ \hline \end{array}$$





$$\begin{array}{|c|} \hline 3 \\ \hline \end{array} + \begin{array}{|c|} \hline 3 \\ \hline \end{array} = \begin{array}{|c|} \hline 6 \\ \hline \end{array}$$

$$\begin{array}{|c|} \hline 6 \\ \hline \end{array} + \begin{array}{|c|} \hline 2 \\ \hline \end{array} = \begin{array}{|c|} \hline 8 \\ \hline \end{array}$$

$$\begin{array}{|c|} \hline 2 \\ \hline \end{array} + \begin{array}{|c|} \hline 7 \\ \hline \end{array} = \begin{array}{|c|} \hline 9 \\ \hline \end{array}$$

$$\begin{array}{|c|} \hline 8 \\ \hline \end{array} + \begin{array}{|c|} \hline 1 \\ \hline \end{array} = \begin{array}{|c|} \hline 9 \\ \hline \end{array}$$

$$\begin{array}{|c|} \hline 2 \\ \hline \end{array} + \begin{array}{|c|} \hline 2 \\ \hline \end{array} = \begin{array}{|c|} \hline 4 \\ \hline \end{array}$$





3. Tel het aantal ogen van de dobbelstenen bij elkaar op:

$$\begin{array}{|c|} \hline 4 \\ \hline \end{array} + \begin{array}{|c|} \hline 2 \\ \hline \end{array} = \begin{array}{|c|} \hline 6 \\ \hline \end{array}$$

$$\begin{array}{|c|} \hline 6 \\ \hline \end{array} + \begin{array}{|c|} \hline 1 \\ \hline \end{array} = \begin{array}{|c|} \hline 7 \\ \hline \end{array}$$

$$\begin{array}{|c|} \hline 3 \\ \hline \end{array} + \begin{array}{|c|} \hline 5 \\ \hline \end{array} = \begin{array}{|c|} \hline 8 \\ \hline \end{array}$$

$$\begin{array}{|c|} \hline 4 \\ \hline \end{array} + \begin{array}{|c|} \hline 6 \\ \hline \end{array} = \begin{array}{|c|} \hline 10 \\ \hline \end{array}$$







$$\begin{array}{|c|} \hline 5 \\ \hline \end{array} + \begin{array}{|c|} \hline 4 \\ \hline \end{array} = \begin{array}{|c|} \hline 9 \\ \hline \end{array}$$

$$\begin{array}{|c|} \hline 3 \\ \hline \end{array} + \begin{array}{|c|} \hline 4 \\ \hline \end{array} = \begin{array}{|c|} \hline 7 \\ \hline \end{array}$$

$$\begin{array}{|c|} \hline 1 \\ \hline \end{array} + \begin{array}{|c|} \hline 6 \\ \hline \end{array} = \begin{array}{|c|} \hline 7 \\ \hline \end{array}$$

$$\begin{array}{|c|} \hline 3 \\ \hline \end{array} + \begin{array}{|c|} \hline 1 \\ \hline \end{array} = \begin{array}{|c|} \hline 4 \\ \hline \end{array}$$



$$\begin{array}{|c|} \hline 6 \\ \hline \end{array} + \begin{array}{|c|} \hline 1 \\ \hline \end{array} = \begin{array}{|c|} \hline 7 \\ \hline \end{array}$$

$$\begin{array}{|c|} \hline 2 \\ \hline \end{array} + \begin{array}{|c|} \hline 5 \\ \hline \end{array} = \begin{array}{|c|} \hline 7 \\ \hline \end{array}$$

$$\begin{array}{|c|} \hline 2 \\ \hline \end{array} + \begin{array}{|c|} \hline 4 \\ \hline \end{array} = \begin{array}{|c|} \hline 6 \\ \hline \end{array}$$

$$\begin{array}{|c|} \hline 5 \\ \hline \end{array} + \begin{array}{|c|} \hline 3 \\ \hline \end{array} = \begin{array}{|c|} \hline 8 \\ \hline \end{array}$$