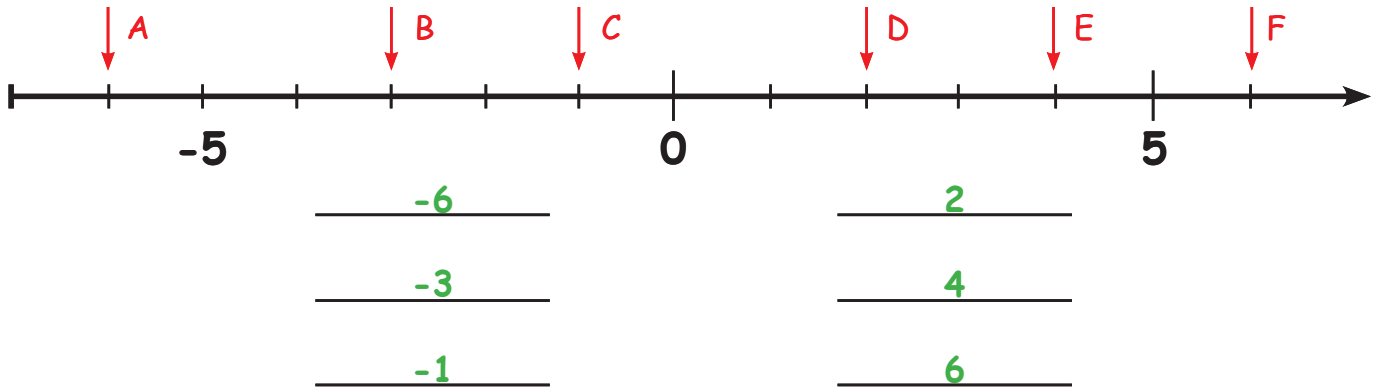


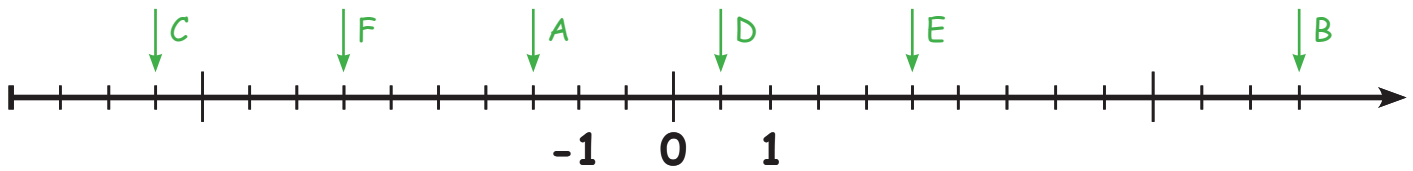
Getallen op de getallenlijn




Lees de gemarkeerde getallen af en schrijf ze op de lijnen!



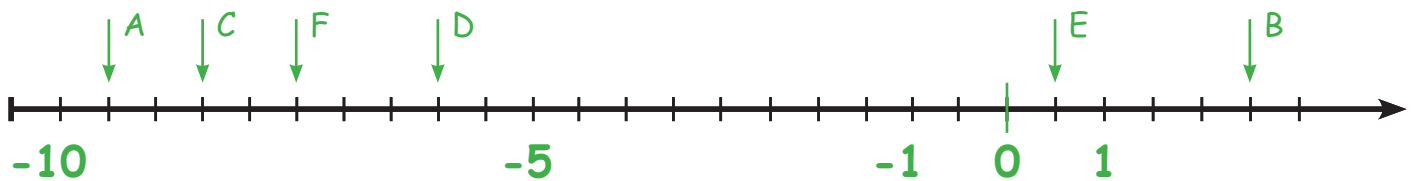
Markeer de gegeven getallen op de getallenlijn!



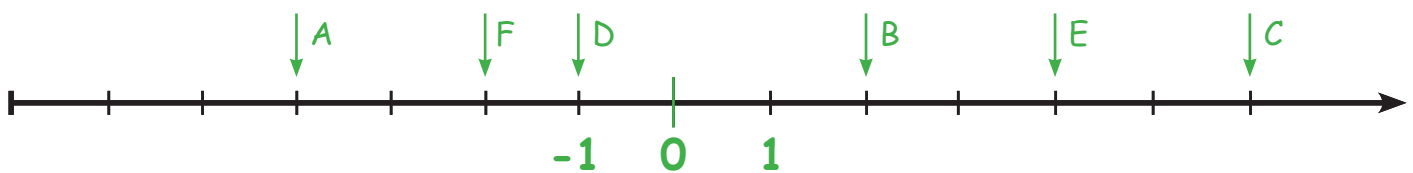
A	<u> </u>	-1,5	D	<u> </u>	0,5
B	<u> </u>	6,5	E	<u> </u>	2,5
C	<u> </u>	-5,5	F	<u> </u>	-3,5



Verdeel de getallenlijn zinvol en markeer de gegeven getallen!



A	<u> </u>	-9,5	C	<u> </u>	-8,5	E	<u> </u>	0,5
B	<u> </u>	2,5	D	<u> </u>	-6	F	<u> </u>	-7,5



A	<u> </u>	-4	C	<u> </u>	6	E	<u> </u>	4
B	<u> </u>	2	D	<u> </u>	-1	F	<u> </u>	-2