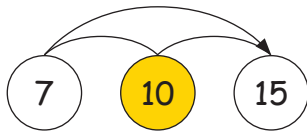


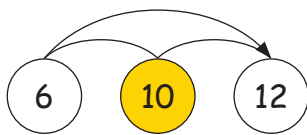
Hoeveel ontbreken er?1. Hoeveel ontbreekt er?

Reken eerst uit op hele tientallen, dan is het makkelijker om de som op te lossen.



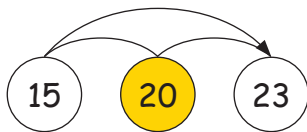
$$7 + 3 = 10 + 5 = 15$$

$$7 + 8 = 15$$



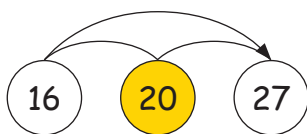
$$6 + 4 = 10 + 2 = 12$$

$$6 + 6 = 12$$




$$15 + 8 = 20 + 3 = 23$$

$$15 + 8 = 23$$



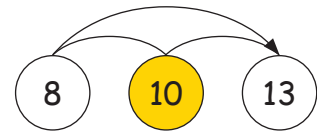
$$16 + 11 = 20 + 7 = 27$$

$$16 + 11 = 27$$



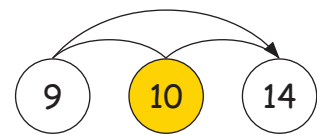
$$5 + 12 = 10 + 7 = 17$$

$$5 + 12 = 17$$



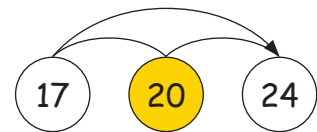
$$8 + 5 = 10 + 3 = 13$$

$$8 + 5 = 13$$



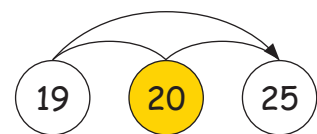
$$9 + 4 = 10 + 3 = 13$$

$$9 + 4 = 13$$




$$17 + 7 = 20 + 4 = 24$$

$$17 + 7 = 24$$



$$19 + 6 = 20 + 5 = 25$$

$$19 + 6 = 25$$



$$18 + 8 = 20 + 6 = 26$$

$$18 + 8 = 26$$