

## Explaining when it is...o'clock

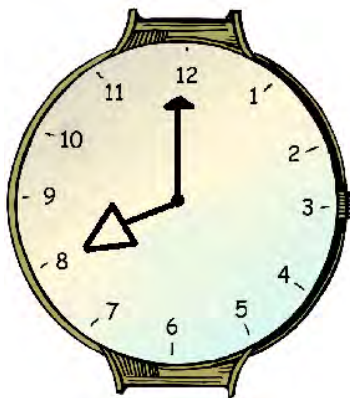


The minute hand is on 12.  
The hour hand is on 7.  
It is 7 o'clock.

Colour the hour hand red and circle the correct time.


5 o'clock

8 o'clock



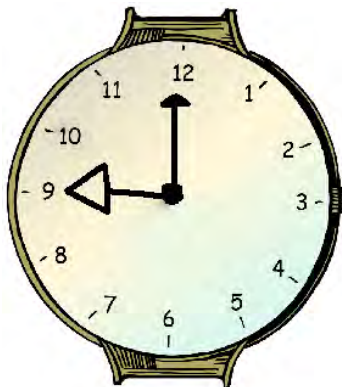
2 o'clock

4 o'clock




9 o'clock

12 o'clock




1 o'clock

10 o'clock



3 o'clock

10 o'clock



11 o'clock

6 o'clock

