
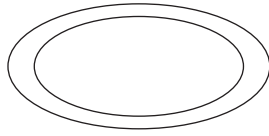


Kennis maken met het cijfer 0


1. Schrijf op, hoeveel stuks je ziet:




1




0



3



2




4



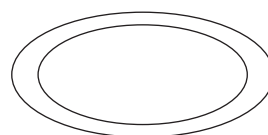
4



2



1

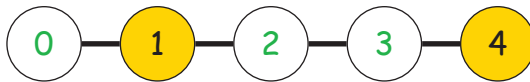
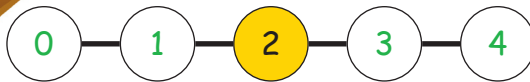
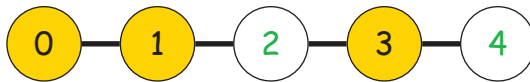
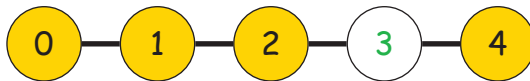


0



3

2. Vul de ontbrekende cijfers in:



3. Het cijfer 4 ontleden:

$1 + 3 = 4$

$4 = 3 + \underline{1}$

$2 + \underline{2} = 4$

$4 = \underline{2} + 2$

$\underline{3} + 1 = 4$

$4 = 0 + \underline{4}$

$4 + \underline{0} = 4$

$4 = 1 + \underline{3}$

$0 + \underline{4} = 4$

$4 = 4 + \underline{0}$