

# Oefeningen tot 6


Voltooi de rijen:

6 6 6 6 6 6

6 6 6 6 6 6

6 6 6 6 6 6 6 6 6 6 6 6 6 6

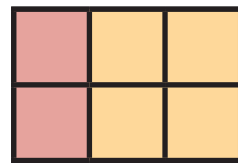
Kleur de vakjes in en los de sommen op:




$5 + 1 = \underline{6}$



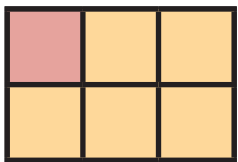
$4 + 2 = \underline{6}$



$2 + 4 = \underline{6}$




$3 + 3 = \underline{6}$



$1 + 5 = \underline{6}$




$0 + 6 = \underline{6}$




$6 + 0 = \underline{6}$




Schrijf het aantal in de vakjes:




1




5




2



3



6



4