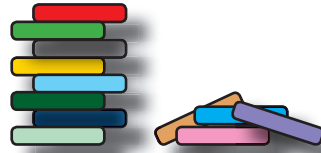


# Onder de twintig



Tina bouwt met 12  
bouwstenen een toren.

12



4 ervan vallen naar  
beneden.

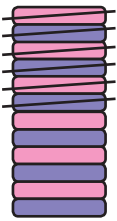
- 4

Hoeveel blokken  
heeft de toren nu?

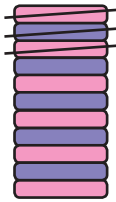
= 8



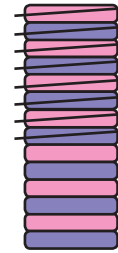
Lees hardop voor en reken uit.



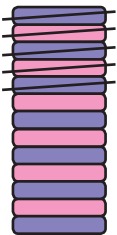
$$12 - 6 = \underline{6}$$



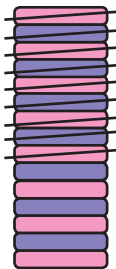
$$11 - 3 = \underline{8}$$




$$14 - 8 = \underline{6}$$



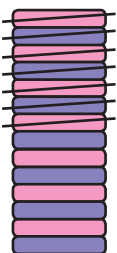
$$13 - 5 = \underline{8}$$



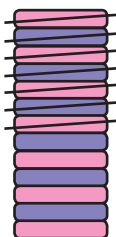
$$15 - 9 = \underline{6}$$



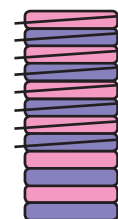
$$12 - 3 = \underline{9}$$



$$15 - 7 = \underline{8}$$



$$13 - 6 = \underline{7}$$



$$11 - 8 = \underline{3}$$