

















Rekenen met afbeeldingen

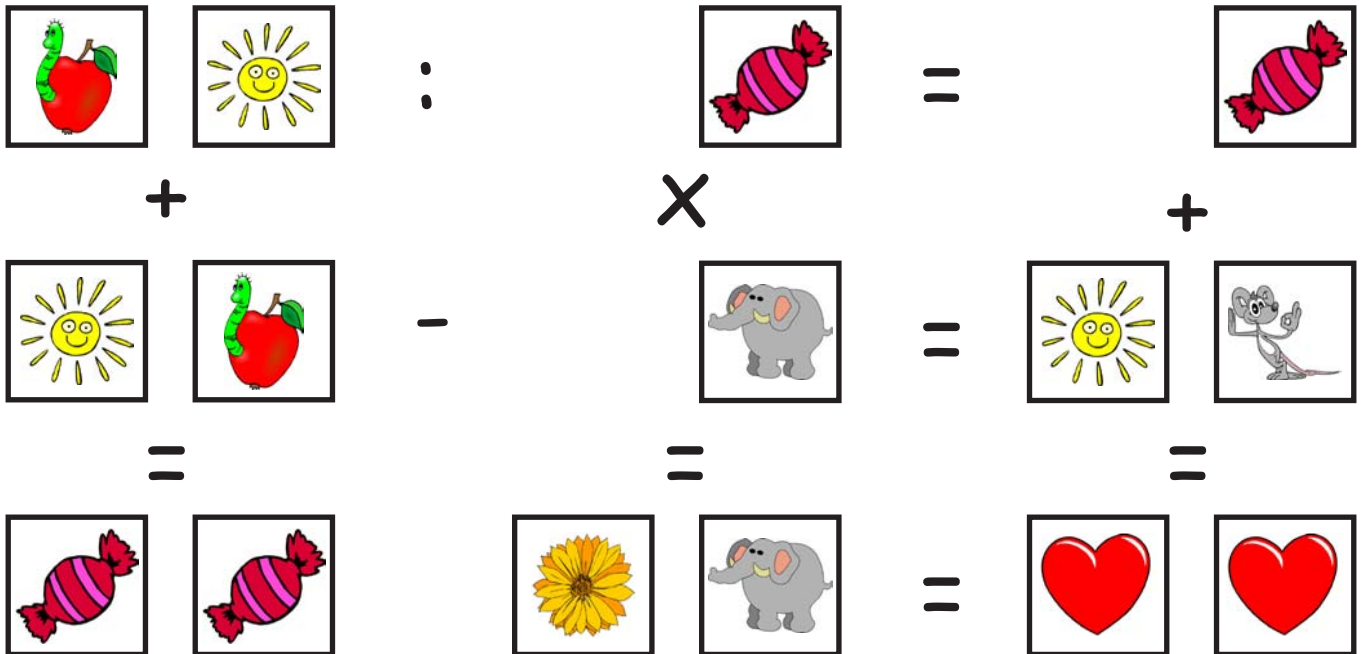
Probeer de sommen op te lossen!
Dezelfde afbeeldingen betekenen dezelfde getallen!

		$:$		$=$			
$-$			\times		$+$		
		$+$			$=$		
$=$			$=$		$=$		
					$=$		

vul de oplossing in de vakjes in:

<input style="width: 80px; height: 50px;" type="text" value="6"/>	<input style="width: 80px; height: 50px;" type="text" value="3"/>	$:$	<input style="width: 80px; height: 50px;" type="text" value="7"/>	$=$	<input style="width: 80px; height: 50px;" type="text" value="9"/>		
$-$			\times		$+$		
<input style="width: 80px; height: 50px;" type="text" value="2"/>	<input style="width: 80px; height: 50px;" type="text" value="3"/>	$+$	<input style="width: 80px; height: 50px;" type="text" value="1"/>	<input style="width: 80px; height: 50px;" type="text" value="3"/>	$=$	<input style="width: 80px; height: 50px;" type="text" value="3"/>	<input style="width: 80px; height: 50px;" type="text" value="6"/>
$=$			$=$		$=$		
<input style="width: 80px; height: 50px;" type="text" value="4"/>	<input style="width: 80px; height: 50px;" type="text" value="0"/>		<input style="width: 80px; height: 50px;" type="text" value="9"/>	<input style="width: 80px; height: 50px;" type="text" value="1"/>	$=$	<input style="width: 80px; height: 50px;" type="text" value="4"/>	<input style="width: 80px; height: 50px;" type="text" value="5"/>

Rekenen met afbeeldingen



vul de oplossing in de vakjes in:

