

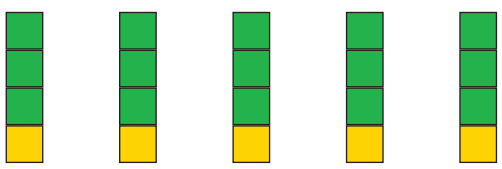
## Teilen im Zahlenraum 20

### 1. Zeichne gleich hohe Türme:

Du hast 20 Bausteine zur Verfügung.

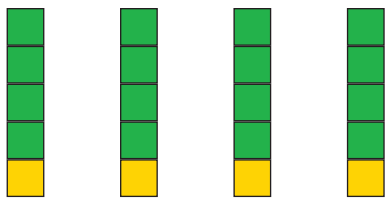
Zeichne 5 Türme.

20	:	5	=	4
----	---	---	---	---



Zeichne 4 Türme.


20	:	4	=	5
----	---	---	---	---



Du hast 12 Bausteine zur Verfügung.

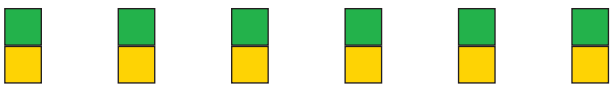
Zeichne 3 Türme.

12	:	3	=	4
----	---	---	---	---



Zeichne 6 Türme.


12	:	6	=	2
----	---	---	---	---



Du hast 18 Bausteine zur Verfügung.

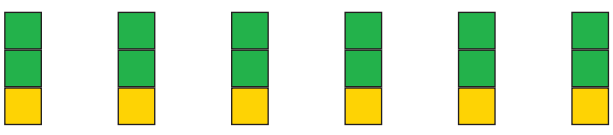
Zeichne 9 Türme.

18	:	9	=	2
----	---	---	---	---



Zeichne 6 Türme.

18	:	6	=	3
----	---	---	---	---



### 2. Löse die Aufgaben:

15	:	3	=	5
----	---	---	---	---

14	:	7	=	2
----	---	---	---	---

6	:	3	=	2
---	---	---	---	---

16	:	8	=	2
----	---	---	---	---

20	:	5	=	4
----	---	---	---	---

9	:	1	=	9
---	---	---	---	---

5	:	1	=	5
---	---	---	---	---

18	:	6	=	3
----	---	---	---	---

8	:	2	=	4
---	---	---	---	---

16	:	4	=	4
----	---	---	---	---

10	:	5	=	2
----	---	---	---	---

20	:	2	=	10
----	---	---	---	----

12	:	6	=	2
----	---	---	---	---

18	:	9	=	2
----	---	---	---	---

4	:	2	=	2
---	---	---	---	---

8	:	4	=	2
---	---	---	---	---