



# The Clock


What's the time? Fill in the gaps:




It's twelve o'clock.




It's ten o'clock.




It's one o'clock.




It's quarter past ten.




It's half past two.



It's quarter to eleven.



It's half past nine.



It's quarter to seven.

