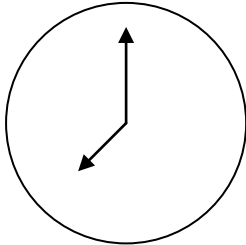


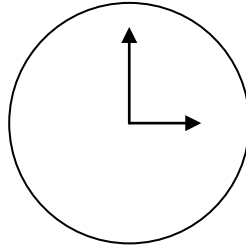
What's the time?

Fill in the correct digit and write it out:



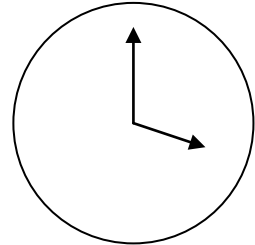
7

It is seven o'clock.



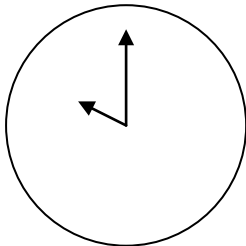
3

It is three o'clock.



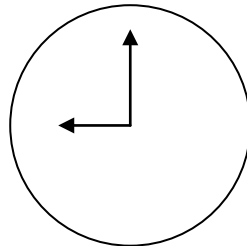
4

It is four o'clock.



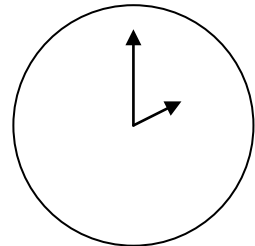
10

It is ten o'clock.



9

It is nine o'clock.



2

It is two o'clock.



3

nine

two

2

9

seven

three

8

10

ten

four

4