



Plus und Minus im Zahlenraum bis 7**1. Ergänze die fehlenden Zahlen:**

Fällt dir dabei etwas auf?




$3 + 4 = \underline{\quad}$

$7 - 4 = \underline{\quad}$




$1 + 6 = \underline{\quad}$

$7 - 6 = \underline{\quad}$




$5 + 2 = \underline{\quad}$

$7 - 2 = \underline{\quad}$




$4 + 3 = \underline{\quad}$

$7 - 3 = \underline{\quad}$



$2 + 5 = \underline{\quad}$

$7 - 5 = \underline{\quad}$



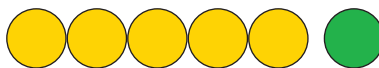
$6 + 1 = \underline{\quad}$

$7 - 1 = \underline{\quad}$



$3 + 3 = \underline{\quad}$

$6 - 3 = \underline{\quad}$




$5 + 1 = \underline{\quad}$

$6 - 1 = \underline{\quad}$



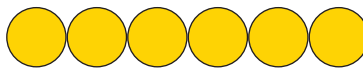
$2 + 4 = \underline{\quad}$

$6 - 4 = \underline{\quad}$



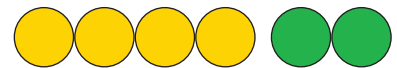
$1 + 5 = \underline{\quad}$

$6 - 5 = \underline{\quad}$



$6 + 0 = \underline{\quad}$

$6 - 0 = \underline{\quad}$




$4 + 2 = \underline{\quad}$

$6 - 2 = \underline{\quad}$




$2 + 3 = \underline{\quad}$

$5 - 3 = \underline{\quad}$




$1 + 4 = \underline{\quad}$

$5 - 4 = \underline{\quad}$



$3 + 2 = \underline{\quad}$

$5 - 2 = \underline{\quad}$




$4 + 1 = \underline{\quad}$

$5 - 1 = \underline{\quad}$



$2 + 1 = \underline{\quad}$

$3 - 1 = \underline{\quad}$



$3 + 1 = \underline{\quad}$

$4 - 1 = \underline{\quad}$