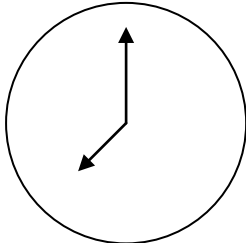

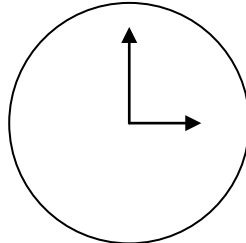


What's the time?

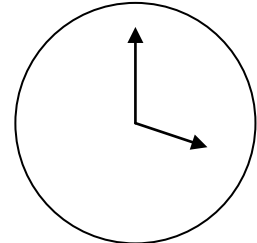
Fill in the correct digit and write it out:



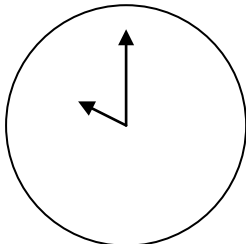
It is _____ o'clock.



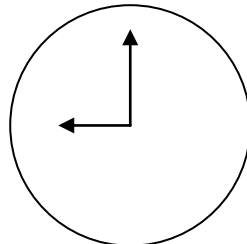
It is _____ o'clock.



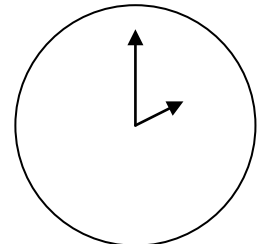
It is _____ o'clock.



It is _____ o'clock.



It is _____ o'clock.



It is _____ o'clock.



3

nine

two

2

9

seven

three

8

10

ten

four

4